

7.GM.1 Quiz 1 Std: 7.GM.1

1. A container is a rectangular prism with the measurements of 25 cm in length, 15 cm in width and 10 cm in height. Find the surface area of the container.

A $750cm^2$
 B $1250cm^2$
 C $1550cm^2$
 D $3750cm^2$

Level 3

Std: 7.GM.1

2. A container is a rectangular prism with the measurements of 25 cm in length, 15 cm in width and 10 cm in height. Find the volume of the container.

A $750cm^3$
 B $1250cm^3$
 C $1550cm^3$
 D $3750cm^3$

Level 3

Std: 7.GM.1

3. If a rectangular prism has a volume of 150 cubic inches, a length of 10 inches and a height of 3 inches. What is the width of rectangular prism?

A $5in$
 B $10in$
 C $15in$
 D $50in$

Level 3

Std: 7.GM.1

4. Given the figure find the surface area.

A $48.125in^2$
 B $83.5in^2$
 C $152.525in^2$
 D $175.55in^2$

Level 3

Std: 7.GM.1

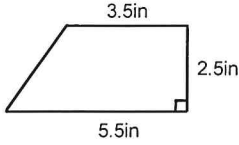
5. Given the figure find the volume.

A $48.125in^3$
 B $83.5in^3$
 C $152.525in^3$
 D $175.55in^3$

Level 3

7.GM.2 Quiz 1 Std: 7.GM.2

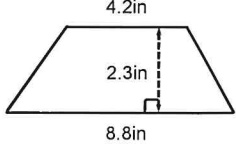
1. Given the figure find the area.



A $11.25in^2$
 B $13.75in^2$
 C $19.25in^2$
 D $48.125in^2$

Level 3

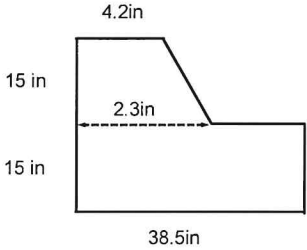
2. Given the figure find the area. Std: 7.GM.2



A $36.96in^2$
 B $20.24in^2$
 C $14.95in^2$
 D $34.125in^2$

Level 3

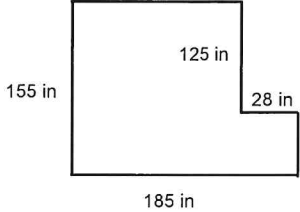
3. Given the figure find the area. Std: 7.GM.2



A $120.26in^2$
 B $265in^2$
 C $492in^2$
 D $626.25in^2$

Level 3

4. Given the figure find the perimeter. Std: 7.GM.2



A $555in$
 B $680in$
 C $780in$
 D $2245.35in$

Level 3

7.GM.3 Quiz 1 Std: 7.GM.3

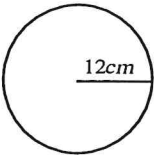
1. Find the circumference use 3.14 for pi:

A 15.14cm

B 25.362cm

C 37.68cm

D 75.36cm



Level 3

Std: 7.GM.3

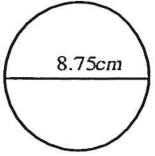
2. Find the circumference leave your answer in terms of pi:

A $4.375\pi cm$

B $8.75\pi cm$

C $17.5\pi cm$

D $75.5625\pi cm$



Level 3

Std: 7.GM.3

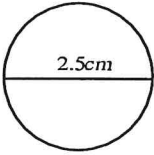
3. Find the area leave your answer in terms of pi:

A $1.5625\pi cm^2$

B $2.5\pi cm^2$

C $6.25\pi cm^2$

D $12.5\pi cm^2$



Level 3

Std: 7.GM.3

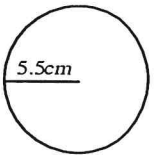
4. Find the area use 3.14 for pi:

A $23.7cm^2$

B $30.25cm^2$

C $94.985cm^2$

D $478.39cm^2$



Level 3

Std: 7.GM.3

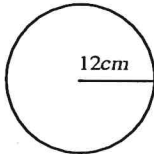
5. Which equation can be used to find the area of the figure below:

A $A = 12^2 \cdot \pi$

B $A = 6^2 \cdot \pi$

C $A = 12 \cdot \pi$

D $A = 24 \cdot \pi$



Level 3

Std: 7.GM.3

6. A circular swimming pool has a distance of 25 feet from edge to edge through the center. How far is the distance around the pool?

A $12.5 \cdot \pi$ ft

B $25 \cdot \pi$ ft

C $144.5 \cdot \pi$ ft

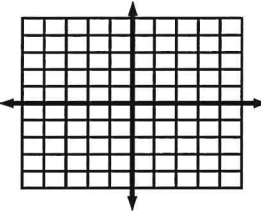
D $289 \cdot \pi$ ft

Level 3

7.GM.4 Quiz 1 Std: 7.GM.4

1. Which set of coordinates describes the translation $(x + 1, y - 2)$ of the given pre-image:
 $X(-3, 2)$ $Y(-1, 2)$ $Z(-2, 1)$

a) $X'(-5,0)$ $Y'(-5,-3)$ $Z'(-2,-3)$
 b) $X'(-3,0)$ $Y'(-1,0)$ $Z'(-2,-1)$
 c) $X'(0,-2)$ $Y'(-1,-3)$ $Z'(2,0)$
 d) $X'(-2,0)$ $Y'(0,0)$ $Z'(-1,-1)$

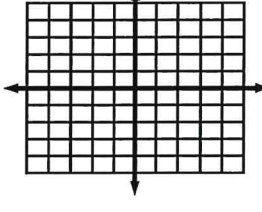


Level 3

Std: 7.GM.4

2. Which set of coordinates describes the translation $(x - 1, y + 4)$ of the given pre-image:
 $X(3, -1)$ $Y(4, -2)$ $Z(3, -3)$

a) $X'(2, 3)$ $Y'(3, 2)$ $Z'(2, 1)$
 b) $X'(-2, -3)$ $Y'(-3, -2)$ $Z'(-2, -1)$
 c) $X'(-2, 3)$ $Y'(-3, 2)$ $Z'(-2, 1)$
 d) $X'(2, -3)$ $Y'(3, -2)$ $Z'(2, -1)$

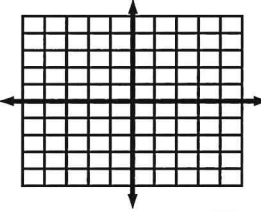


Level 3

Std: 7.GM.4

3. Which set of coordinates describes the reflection across the y-axis of the given pre-image:
 $X(4, 1)$ $Y(2, 5)$ $Z(5, 5)$

a) $X'(-4, 1)$ $Y'(-2, 5)$ $Z'(-5, 5)$
 b) $X'(4, -1)$ $Y'(2, -5)$ $Z'(5, -5)$
 c) $X'(-4, -1)$ $Y'(-2, -5)$ $Z'(-5, -5)$
 d) $X'(4, 1)$ $Y'(2, 5)$ $Z'(5, 5)$

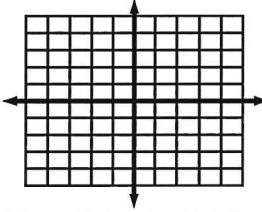


Level 3

Std: 7.GM.4

4. Which set of coordinates describes the reflection across the x-axis of the given pre-image:
 $X(4, 1)$ $Y(2, 5)$ $Z(5, 5)$

a) $X'(-4, 1)$ $Y'(-2, 5)$ $Z'(-5, 5)$
 b) $X'(4, -1)$ $Y'(2, -5)$ $Z'(5, -5)$
 c) $X'(-4, -1)$ $Y'(-2, -5)$ $Z'(-5, -5)$
 d) $X'(4, 1)$ $Y'(2, 5)$ $Z'(5, 5)$

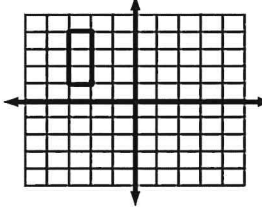


Level 3

Std: 7.GM.4

5. Which set of coordinates is similar to the figure given:

a) Fig A: $(-3, 0)$ $(-3, 3)$ $(5, 3)$ $(5, 0)$
 b) Fig B: $(-3, 1)$ $(3, 3)$ $(-3, 4)$ $(3, 0)$
 c) Fig C: $(0, -1)$ $(0, 5)$ $(2, -1)$ $(2, 5)$
 d) Fig D: $(0, 1)$ $(0, 5)$ $(2, 1)$ $(2, 5)$

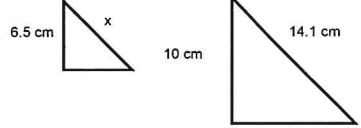


Level 3

Std: 7.GM.4

6. The following two figures are similar. Find the value of x :

a) 3.12 cm
 b) 4.3 cm
 c) 5.76 cm
 d) 9.165 cm



Level 3

7. Which two sets of figures are similar? Std: 7.GM.4

a) Set A Set B

b) Set B

c) Set C

d) Set D

Set A

Set B

Set C

Set D

Level 3

8. Which set of coordinates describes the dilation by a scale factor of 2 of the given pre-image: Std: 7.GM.4

a) Set A: (2, 2) (2, -2) (4, 2) (4, -2)

b) Set B: (2, -2) (-2, -2) (0, 2) (0, -2)

c) Set C: (0, 0) (-2, 0) (0, 2) (-2, 2)

d) Set D: (0, 2) (2, 0) (4, 2) (-2, 2)

Level 3

9. Which set of coordinates describes the dilation by a scale factor of 1/2 of the given pre-image: Std: 7.GM.4

a) Set A: (-2, -2) (-2, 0) (0, 0) (0, -2)

b) Set B: (-2, -2) (-2, 3) (0, 2) (0, -3)

c) Set C: (-2, 2) (-2, -1) (2, 2) (2, -1)

d) Set C: (-4, 4) (-4, -2) (4, 4) (4, -2)

Level 3

10. The given coordinates will be reflected across the x-axis and then will be translated 7 units left and 5 units up. What will the second image be? Std: 7.GM.4

A(4, 5) B(4, 1) C(5, 3)

a) A''(-3, 0) B''(-3, 4) C''(-2, 2)

b) A''(-3, 4) B''(-2, 2) C''(-3, 0)

c) A''(-2, -2) B''(3, 0) C''(3, -4)

d) A''(-2, 2) B''(-3, 0) C''(-3, 4)

Level 3

7.GM Standard Quiz Std: 7.GM.1

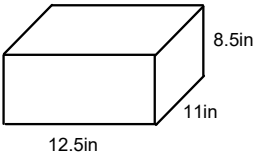
1. A container is a rectangular prism with the measurements of 12 cm in length, 9 cm in width and 6 cm in height. Find the surface area of the container.

A $123cm^2$
 B $648cm^2$
 C $258cm^2$
 D $468cm^2$

Level 3

Std: 7.GM.1

2. Given the figure find the volume.



A $600.8in^3$
 B $1168.75in^3$
 C $1358.32in^3$
 D $2369.33in^3$

Level 3

Std: 7.GM.1

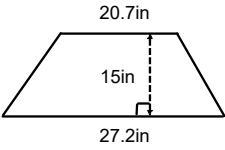
3. If a rectangular prism has a volume of 2,310 cubic inches, a length of 15 inches and a height of 7 inches. What is the width of rectangular prism?

A $7in$
 B $22in$
 C $32in$
 D $45in$

Level 3

Std: 7.GM.2

4. Given the figure find the area.

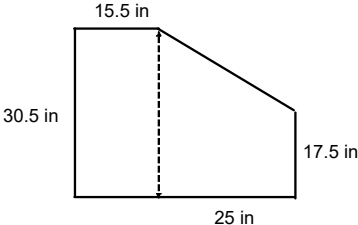


A $8383.5in^2$
 B $279.45in^2$
 C $558.9in^2$
 D $359.25in^2$

Level 3

Std: 7.GM.2

5. Given the figure find the area.

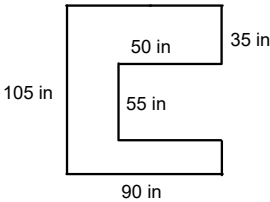


A $553in^2$
 B $785in^2$
 C $1072.75in^2$
 D $1239.3in^2$

Level 3

Std: 7.GM.2

6. Given the figure find the perimeter.

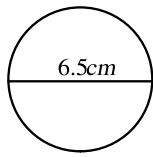


A $335in$
 B $385in$
 C $400in$
 D $480in$

Level 3

7. Find the area leave your answer in terms of pi: Std: 7.GM.3

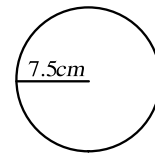
- A $10.5625\pi cm^2$
- B $6.5\pi cm^2$
- C $3.25\pi cm^2$
- D $3.14\pi cm^2$



Level 3

8. Find the area use 3.14 for pi: Std: 7.GM.3

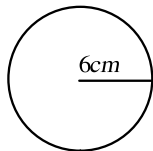
- A $23.55cm^2$
- B $176.625cm^2$
- C $706.5cm^2$
- D $1003.35cm^2$



Level 3

9. Which equation can be used to find the circumference of the figure below: Std: 7.GM.3

- A $C = 12^2 \cdot \pi$
- B $C = 6^2 \cdot \pi$
- C $C = 12 \cdot \pi$
- D $C = 24 \cdot \pi$

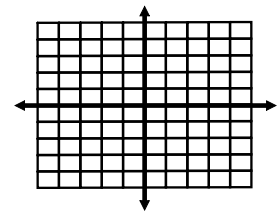


Level 3

10. Which set of coordinates describes the translation $(x + 3, y + 1)$ of the given pre-image: Std: 7.GM.4

X(-5, -2) Y(-3, 0) Z(-4, -4)

- a) X'(-2,-1) Y'(0,1) Z'(-1,-3)
- b) X'(-3,0) Y'(-1,0) Z'(-2,-1)
- c) X'(0,-2) Y'(-1,-3) Z'(2,0)
- d) X'(-2,0) Y'(0,0) Z'(-1,-1)

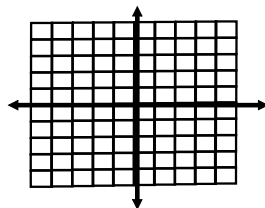


Level 3

11. Which set of coordinates describes the reflection across the x-axis of the given pre-image: Std: 7.GM.4

X(-5, -5) Y(-5, -1) Z(-1, -5)

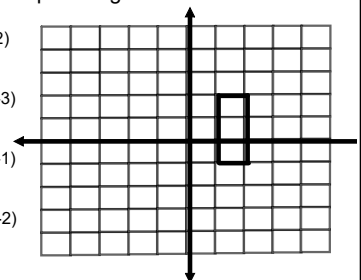
- a) X'(5, -5) Y'(5, -1) Z'(1, -5)
- b) X'(4, -1) Y'(2, -5) Z'(5, -5)
- c) X'(-5, 5) Y'(-5, 1) Z'(-1, 5)
- d) X'(4, 1) Y'(2, 5) Z'(5, 5)



Level 3

12. Which set of coordinates describes the dilation by a scale factor of 2 of the given pre-image: Std: 7.GM.4

- a) Set A: (2, 4) (4, 4) (2, -2) (4, -2)
- b) Set B: (-2, -2) (-2, 3) (0, 2) (0, -3)
- c) Set C: (-2, 2) (-2, -1) (2, 2) (2, -1)
- d) Set D: (-4, 4) (-4, -2) (4, 4) (4, -2)



Level 3

Standard Quiz	Question Number Followed by the Answer											
7.N.1Quiz1	1.B	2.D	3.B	4.B	5.D	6.D						
7.N.2Quiz1	1.C	2.D	3.B	4.D	5.B	6.D	7.A	8.A				
7.N.2Quiz2	1.C	2.A	3.D	4.B	5.D							
7.N.Quiz	1.A	2.B	3.D	4.A	5.C	6.C	7.A*	8.B*	9.A	10.C	11.C	12.C
7.A.1Quiz1	1.C	2.A	3.C	4.A	5.B	6.D						
7.A.2Quiz1	1.A	2.D	3.C	4.A	5.C	6.A	7.A	8.C				
7.A.3Quiz1	1.A	2.D	3.D	4.D	5.A							
7.A.4Quiz1	1.A	2.C	3.B	4.B	5.B							
7.A.Std.Quiz	1.C	2.A	3.C	4.B	5.C	6.A	7.B	8.D	9.B	10.B	11.D	12.B
7.GM.1Quiz1	1.C	2.D	3.A	4.B	5.A							
7.GM.2Quiz1	1.A	2.C	3.D	4.B								
7.GM.3Quiz1	1.D	2.B	3.A	4.C	5.A	6.B						
7.GM.4Quiz1	1.D	2.A	3.A	4.B	5.C	6.D	7.C	8.A	9.C	10.A		
7.GM.Std.Quiz	1.D	2.B	3.B	4.D	5.C	6.D	7.A	8.B	9.C	10.A	11.C	12.A
7.D.1Quiz1	1.B	2.B	3.C	4.A	5.D	6.D						
7.D.2Quiz1	1.B	2.C	3.A	4.C	5.D							
7.D.Std.Quiz	1.A	2.A	3.C	4.D	5.B	6.C	7.C	8.D	9.D	10.A	11.B	12.C
Standard Test	1.B	2.B	3.C	4.C	5.A	6.C	7.C	8.A	9.B	10.D	11.C	12.A
	13.D	14.C	15.A	16.C	17.C	18.D	19.C	20.A	21.A	22.D	23.D	24.A
	25.C	26.B	27.B	28.D	29.C	30.D	31.B	32.D	33.B	34.D	35.D	36.B
	37.C	38.A	39.D	40.D	41.D	42.C						